



ST. LAWRENCE HIGH SCHOOL

A JESUIT CHRISTIAN MINORITY INSTITUTION

3rd Term Test - 2019

Class : 1 A, B & C

F.M. : 45

Date : 22.11.2019

Roll No: _____

Sub : Arithmetic
Duration : 1hr 30 mins

(Marks will be deducted for untidy work and work not done in systematic manner).

SECTION - A

1) Write the number names in figures:

(3)

| | |
|-------------------------------|--|
| FIVE HUNDRED AND EIGHTY EIGHT | |
| SIX HUNDRED AND FIFTY SIX | |
| SEVEN HUNDRED | |

2) What comes before?

(2)

| | |
|--|-----|
| | 600 |
| | 516 |

3) What comes after?

(2)

| | |
|-----|--|
| 536 | |
| 667 | |

4) Put $<$, $>$ or $=$

(3)

| | | |
|----|--|----|
| 37 | | 45 |
| 15 | | 15 |
| 76 | | 67 |

SECTION - B

5) Rewrite the numbers in ascending order:

(2)

64 54 74

6) Rewrite the numbers in descending order:

(2)


90 96 92

7) Count backwards and write the numbers in seventies :

(3)

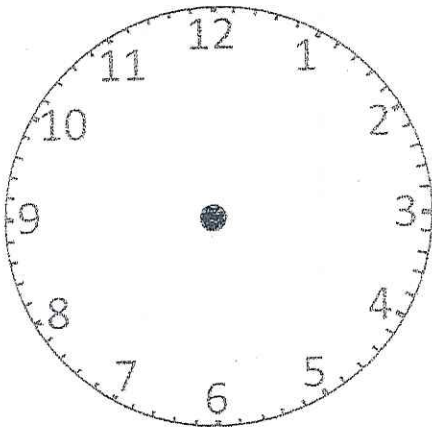
8) Draw a triangle in the box:

(2)

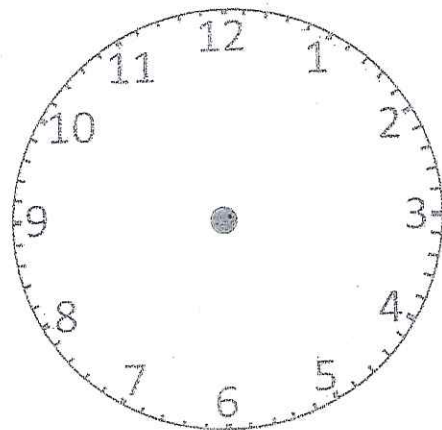


9) Draw the hands of the clock to show the time given below:

(2)




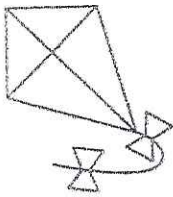
5 o'clock



9 o'clock

10) Count the money and write the cost of each item:


(2)




+



=



+



=

11) Write counting in tens till 100:

(2)

10, _____ , _____ , _____ , _____

_____ , _____ , _____ , _____ , _____ 100.

SECTION – C

12) There are 52 men and 47 women in the park. How many people in all?

(5)

13) 16 boys are playing football. 22 are playing cricket. How many children in all?

(5)

14) Minu had 33 pencils. 12 are lost. How many are left?

(5)

15) Write in words from 451 to 455

(5)





ST. LAWRENCE HIGH SCHOOL

A JESUIT CHRISTIAN MINORITY INSTITUTION



3rd Term Test - 2019

Sub : Arithmetic
Duration : 1hr 30 mins

Class : 1 A, B & C
MODEL ANSWERS

F.M. : 45
Date : 22.11.2019
Roll No:

(Marks will be deducted for untidy work and work not done in systematic manner).

SECTION - A

1) Write the number names in figures:

(3)

| | |
|-------------------------------|-----|
| FIVE HUNDRED AND EIGHTY EIGHT | 588 |
| SIX HUNDRED AND FIFTY SIX | 656 |
| SEVEN HUNDRED | 700 |

2) What comes before?

(2)

| | |
|-----|-----|
| 599 | 600 |
| 515 | 516 |

3) What comes after?

(2)

| | |
|-----|-----|
| 536 | 537 |
| 667 | 668 |

4) Put $<$, $>$ or $=$

(3)

| | | |
|----|-----|----|
| 37 | $<$ | 45 |
| 15 | $=$ | 15 |
| 76 | $>$ | 67 |

SECTION - B

5) Rewrite the numbers in ascending order:

(2)

64 54 74
Ans: 54 64 74

6) Rewrite the numbers in descending order:

(2)

90 96 92
Ans: 96 92 90

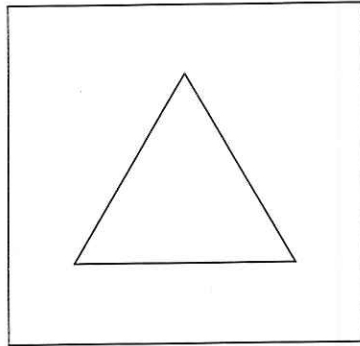
7) Count backwards and write the numbers in seventies :

(3)

Ans: 79, 78, 77, 76, 75, 74, 73, 72, 71, 70

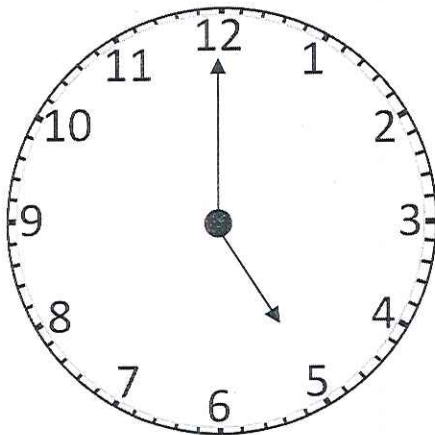
8) Draw a triangle in the box:

(2)

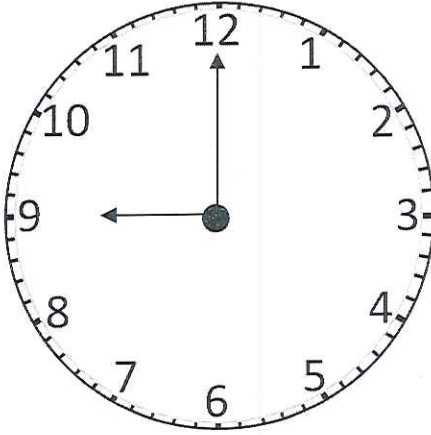


9) Draw the hands of the clock to show the time given below:

(2)



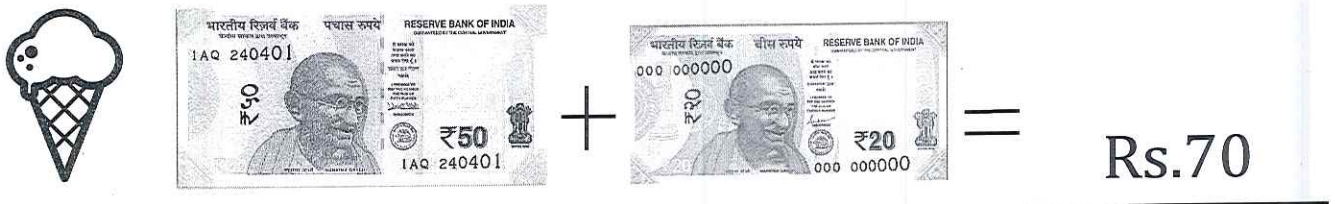
5 o'clock



9 o'clock

10) Count the money and write the cost of each item:

(2)



11) Write counting in tens till 100:

(2)

10, 20, 30, 40, 50, 60, 70, 80, 90, 100.

SECTION – C

12) There are 52 men and 47 women in the park. How many people in all? (5)

Ans: Number of men - 52
Number of women + 47
Therefore number of people in all 99

Ans: There are 99 people in all

13) 16 boys are playing football. 22 are playing cricket. How many children in all? (5)

Ans: Number of boys playing football 16
Number of boys playing cricket + 22
Therefore number of children in all 38

Ans: There are 38 children in all.

14) Minu had 33 pencils. 12 are lost. How many are left? (5)

Ans: Number of pencils Minu had 33
Number of pencils lost - 12
Therefore number of pencils left 21

Ans: There are 21 pencils left.

15) Write in words from 451 to 455 (5)

Ans: 4 5 1 - Four hundred and fifty one.

4 5 2 - Four hundred and fifty two.

4 5 3 - Four hundred and fifty three.

4 5 4 - Four hundred and fifty four.

4 5 5 - Four hundred and fifty five.

