



ST. LAWRENCE HIGH SCHOOL

A JESUIT CHRISTIAN MINORITY INSTITUTION

3rd Term Test – 2018



Sub : Arithmetic

Duration : 1 hr 30 mins

Class : 2 A, B & C

Roll No:

F.M. : 35

Date : 20.11.2018

(Marks will be deducted for untidy work, spelling mistakes and work not done in systematic manner).

SECTION - A (8 marks)

(1x8=8)

1. a) How many tens are there in 250?
- b) Which is greater : 8 tens or 88?
- c) 83 plus 3 tens minus 5 tens =
- d) Take away 2 tens from 6 fives:
- e) $290 + \dots = 300$
- f) $10 \times 10 = \dots$ tens
- g) 1 less than 500 is
- h) 3 boys got 9 sweets each. How many sweets are there in all?

SECTION - B (12 marks)

- 2a) Rewrite the numbers from the smallest to the biggest:

(2x2=4)

417, 401, 427, 467=

- b) Rewrite the numbers from the biggest to the smallest:

999, 909, 919, 995=

3. With the help of diagrams, show the following fractions :

(2x2=4)

a) $\frac{1}{2}$

b) $\frac{3}{4}$

4. Do as directed :

(2x2=4)

a)

T	O
4	5
x	8

Answer:

b)


3	$\overline{)18}$
---	------------------

Answer :


SECTION - C (15 marks)

5. Draw and colour as directed :

(5)



CUBE



CYLINDER

6. Draw and show the following time on a clock :

(5)

Half past three :

9. Reena had Rs. 65. She bought a doll for Rs. 32. How much money is left with her?

(5)



ST. LAWRENCE HIGH SCHOOL
A JESUIT CHRISTIAN MINORITY INSTITUTION



3rd Term Test 2018

Sub : **Arithmetic**

Class : 2 A, B & C

F.M. : 35

Duration : 1 hr 30 mins

Roll No:

Date : 20.11.2018

Model Answer

(Marks will be deducted for untidy work, spelling mistakes and work not done in systematic manner).

SECTIONA (8 marks)

(1x8=8)

1. a) How many tens are there in 250? 25
- b) Which is greater : 8 tens or 88? 88
- c) 83 plus 3 tens minus 5 tens = 63
- d) Take away 2 tens from 6 fives: 10
- e) $290 + \dots\dots\dots 10 \dots\dots\dots = 300$
- f) $10 \times 10 = \dots\dots\dots 10 \dots\dots\dots$ tens
- g) 1 less than 500 is 499
- h) 3 boys got 9 sweets each. How many sweets are there in all? 27

SECTIONB (12 marks)

- 2a) Rewrite the numbers from the smallest to the biggest: (2x2=4)


417, 401, 427, 467 = 401, 417, 427, 467

- b) Rewrite the numbers from the biggest to the smallest:

999, 909, 919, 995 = 999, 995, 919, 909

3. With the help of diagrams, show the following fractions :

(2x2=4)

a) $\frac{1}{2}$ 

b) $\frac{3}{4}$ 

4. Do as directed:

(2x2=4)

a)

$$\begin{array}{r} \text{T} \quad \text{O} \\ 4 \quad 5 \\ \times \quad 8 \\ \hline 360 \end{array}$$

Answer: 360

b)

3


$$\begin{array}{r} 6 \\ 18 \\ 18 \\ \hline \times \end{array}$$

Answer: Q:6
R:0


SECTION C (15 marks)

5. Draw and colour as directed

(5)



CUBE




CYLINDER

6. Draw and show the following time on a clock :

(5)

Half past three :



7. Reena had Rs. 65. She bought a doll for Rs. 32. How much money is left with her?

(5)

Amount Meena had	Rs 65
Cost of a doll	- Rs 32
∴ Amount left with Meena	<u>Rs 33</u>
Ans : Meena has Rs 33 left with her.	

=====

Sharmistha Sen .
22/11/18