



ST. LAWRENCE HIGH SCHOOL

A JESUIT CHRISTIAN MINORITY INSTITUTION

3rd Term Test - 2018



Sub : Arithmetic

Duration : 1 hr 30 mins

Class : 1 A, B & C

Roll No: _____

F.M. : 35

Date : 20.11.2018

(Marks will be deducted for untidy work, spelling mistakes and work not done in systematic manner).

SECTION - A

1. Do as directed :

(8)

a) $25 + 5 =$ _____

b) One more than 45 is _____

c) 35, 40, 60, 10 (Circle the smallest number)

d) 100, 200, 400, 300 (Circle the biggest number)

e) 43 ☐ 36 (use >, < or =)

f) < 70

g) $14 - 3 =$ _____

h) We celebrate Christmas in the month of _____.

SECTION - B

2. Rewrite the numbers from the smallest to the biggest: 55 , 68 , 42 , 82 (2)

_____ , _____ , _____ , _____

3. Rewrite the numbers from the biggest to the smallest: 62 , 95 , 75 , 84 (2)

_____ , _____ , _____ , _____

4. Write in words : (2)

a) 365 = _____

5. Addition:-

(3)

$$\begin{array}{r} \text{T O} \\ 69 \\ + 23 \\ \hline \end{array}$$

Answer. _____

6. Subtraction:-

(3)

$$\begin{array}{r} \text{T O} \\ 73 \\ - 49 \\ \hline \end{array}$$

Answer. _____

SECTION - C

7. 37 apples and 61 oranges. How many fruits are there in all?

(5)

8. Siya had 79 pencils. She gave 23 pencils to Jose. How many pencils are left?

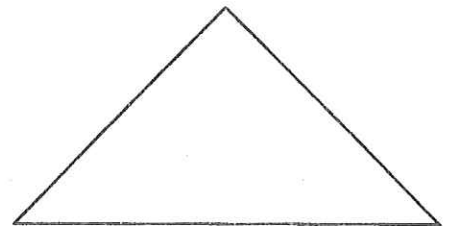
(5)

9. Name the following shapes and colour it:


(4+1)




Ans. _____



Ans. _____



Ans. _____



Ans. _____



ST. LAWRENCE HIGH SCHOOL

A JESUIT CHRISTIAN MINORITY INSTITUTION

3rd Term Test – 2018



Sub : Arithmetic Model Answer

Class : 1 A, B & C

F.M. : 35

Duration : 1 hr 30 mins

Roll No:

Date : 20.11.2018

(Marks will be deducted for untidy work, spelling mistakes and work not done in systematic manner).

SECTION - A

1. Do as directed :

(8)

a) $25 + 5 = \underline{30}$

b) One more than 45 is 46

c) 35, 40, 60, 10 (Circle the smallest number)

d) 100, 200, 400, 300 (Circle the biggest number)

e) $43 \geq 36$ (use $>$, $<$ or $=$)

f) 69 $<$ 70

g) $14 - 3 = \underline{11}$

h) We celebrate Christmas in the month of December

SECTION - B

2. Rewrite the numbers from the smallest to the biggest: 55 , 68 , 42 , 82

(2)

Ans. 42, 55, 68 82

3. Rewrite the numbers from the biggest to the smallest: 62 , 95 , 75 , 84

(2)

Ans. 95, 82, 75, 62

4. Write in words :

(2)

a) 365 - Three hundred and sixty five.

5. Addition:-

(3)

$$\begin{array}{r} \text{T O} \\ 69 \\ + 23 \\ \hline 92 \end{array}$$

Answer. Ninety two

6. Subtraction:-

(3)

$$\begin{array}{r} \text{T O} \\ 73 \\ - 49 \\ \hline 24 \end{array}$$

Answer. Twenty four

SECTION - C

7. 37 apples and 61 oranges. How many fruits are there in all?

(5)

Number of apples	37
Number of oranges	<u>+61</u>
Therefore (sign) Number of fruits in all	<u>98</u>

Answer: There are 98 fruits in all

8. Siya had 79 pencils. She gave 23 pencils to Jose. How many pencils are left?


(5)

Number of pencils Siya had	79
Number of pencils she gave to Jose	- <u>23</u>
Therefore (sign) Total number of pencils left with her	<u>56</u>

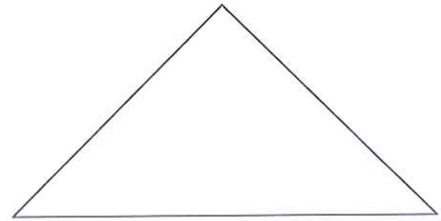
Answer: There are 56 pencils left

9. Name the following shapes and colour it:


(4+1)




Ans. Square



Ans. Triangle



Ans. Rectangle



Ans. Circle

(Children will colour the shapes accordingly)
